

Section 2-4 Continued
Exact Values of 6 Trig Functions

Find the exact values (no decimals) of the given function.

1. $\sin 300^\circ$

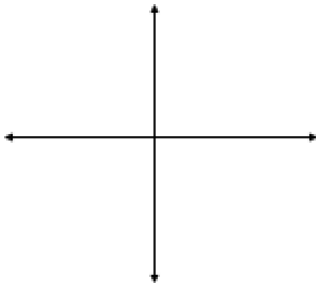
2. $\cos 135^\circ$

3. $\tan 240^\circ$

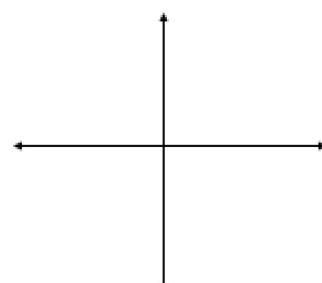
4. $\sec 45^\circ$

Quadrantal Angles (Angles that are on the x-axis or y-axis)

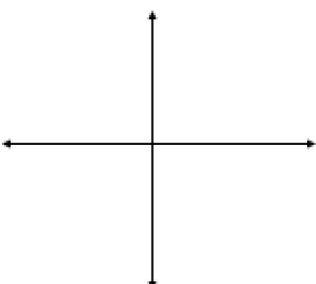
= 0°



= 90°



= 180°



= 270°

